

**Key Learning:** To tell the time to the nearest 5 minutes.

24.2.21

**Success criteria:**

I can identify the time on a clock to the nearest 5 minutes.


I can practically show the time on a clock.

I can draw hands on a clock to show the correct time.


**Deepen** – I can apply my knowledge to play a maths game.

Use your **red pencil to draw the hour hand** and your **blue pencil to draw the minute hand**.


Practise and consider



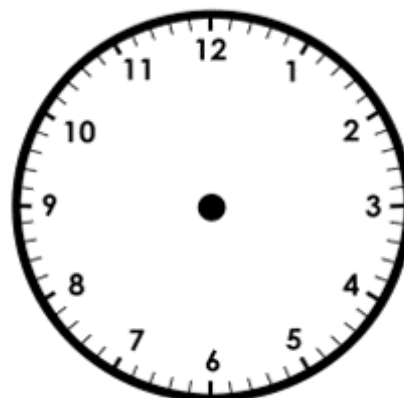
5 minutes past 4



5 minutes to 7



10 minutes past 5



20 minutes to 10

Use your red pencil to draw the hour (little) hand and your blue pencil to draw the minute (big) hand.

Independent



4 'o' clock



Quarter past 5



Half past 11



8 'o' clock



Half past 12




Quarter to 1


OR

Use your red pencil to draw the hour hand and your blue pencil to draw the minute hand.


Independent




5 minutes past 3




5 minutes to 4




10 minutes past 3



20 minutes to 9



10 minutes past 3



15 minutes to 11