

**Key Learning:** To tell the time to the nearest 15 minutes.

23.2.21

**Success criteria:**

I can recognise the hour and minute hand on a clock.

I understand what is meant by quarter to and quarter past.

I can draw hands on a clock to show the correct time.

I can identify the time on a clock to the nearest 15 minutes.

**Deepen** – I can apply my knowledge to play a maths game.



**Star words**

Quarter to

Quarter past


O'Clock

half past.




Use your **red pencil** to draw the **hour hand** and your **blue pencil** to draw the **minute hand**.


Practise and consider




6 o'clock



Quarter past 2



Half past 7



Quarter to 8

Can you write the time that the clock is showing underneath?

Independent

