

Key Learning: To tell the time to the nearest hour and half hour.

22.2.21

Success criteria:

I can order units of time from shortest to longest.

I can name the parts of a clock.


I can recognise the time on a clock for o'clock and half past.

I can draw the hands on a clock when given a time to the nearest hour and half hour.


Deepen – I can check that the time is displayed on a clock correctly.

Use your **red pencil to draw the hour hand** and your **blue pencil to draw the minute hand**.

Independent




2 o'clock



Half past 9



Half past 1



8 o'clock

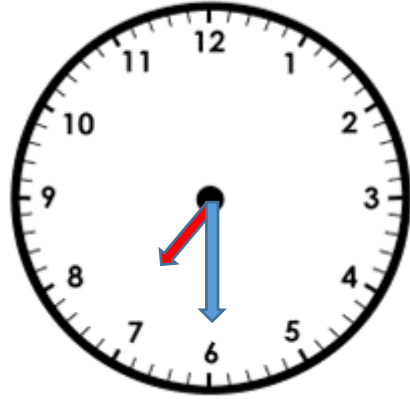
Can you correct the errors?

Use your red pencil to draw the hour hand and your blue pencil to draw the minute hand.

Deepening



3 o'clock



Half past 6



Half past 4



1 o'clock



Half past 3



5 o'clock