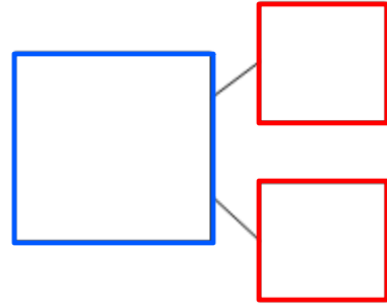
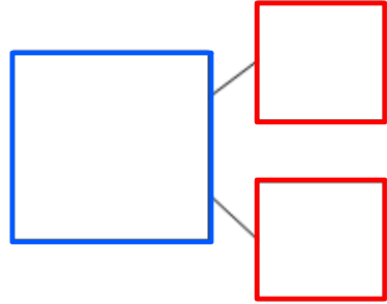


Complete the part part whole models for the equations. Subtract the part to find the answer.

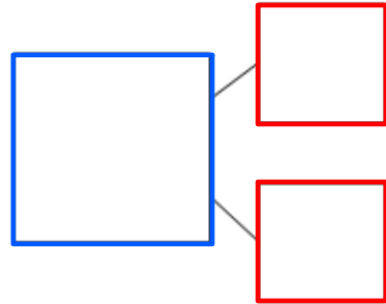
$$16 - 4 = \underline{\quad}$$



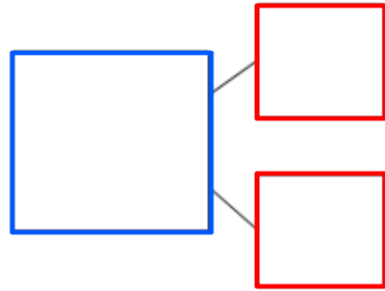
$$13 - 3 = \underline{\quad}$$



$$15 - 2 = \underline{\quad}$$



$$17 - 6 = \underline{\quad}$$



$$11 - 0 = \underline{\quad}$$

