

**Key learning:** To understand the value of coins.

8. 2. 2021

**Success criteria:**



- I can use dienes to represent the value of each coin.
- I can order coins from the lowest value to the highest.
- I can add the value of coins together.

Deepening – To solve word problems involving money.



Draw lines to match the dienes to the correct coin.

Practise and consider

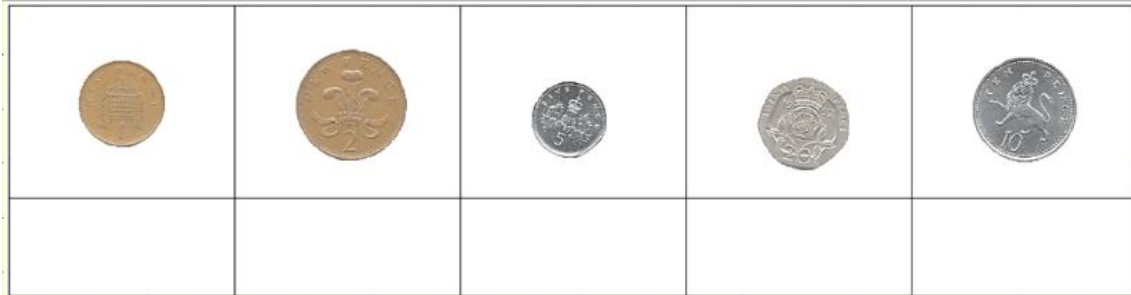


**Task 1:**

Independent

Write the correct value underneath each coin and draw dienes to represent this number.

Draw an arrow to move any coins that are in the wrong place.



**Task 2:**

Count up the money in each purse and write the total underneath it.



Purse 1 =



Purse 2 =

Which purse has the most value?

Nemo had 40p to spend on his school trip. He spent all of his money and bought 2 **different** sweets. Which 2 did he buy?



Crush is drawing dienes to represent his coins. Can you spot his error and correct it for him?



### Deepening

**Key learning:** To understand the value of coins.

Dory and Marlin are comparing their money. Dory says she has more money because she has more coins than Marlin. Is she correct?



Mr Ray is collecting money for a school trip. He needs £2.30 in total. How much money is he short?

