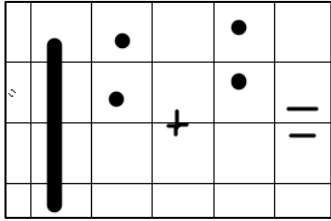
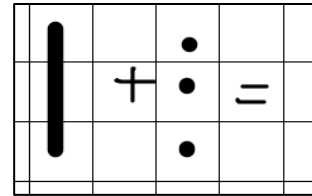


Write these equations into the right box

The answer is:

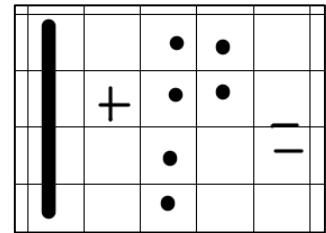


$$10 + 4 =$$



Deepening

$$13 + 3 =$$



$$16 + 2 =$$

Less than 15	More than 15

What other equations could go in these boxes? Can you think of any and put them in the right column.