

Key learning; to add numbers within 20.

Context: using a number line

Engage

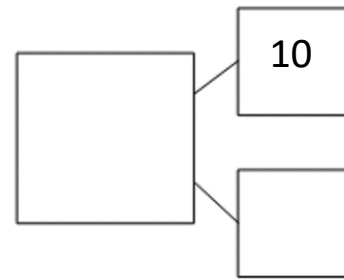
19

Tens	Ones

Write it

Tens	Ones

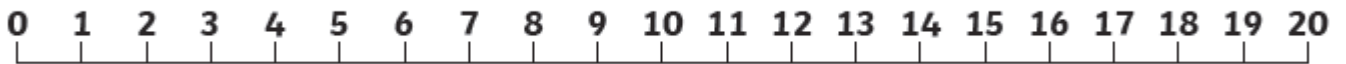
Draw it



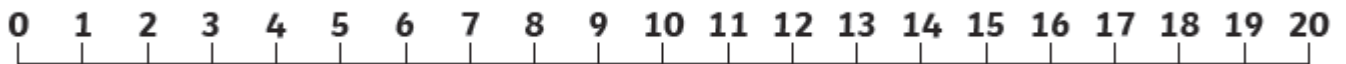
Partition it

Use the number line to help you solve the equations. Remember to start on the biggest number and count carefully as you jump up the numberline.


$9 + 1 = \underline{\quad}$



$13 + 2 = \underline{\quad}$




$16 + 4 = \underline{\quad}$



$12 + 7 =$



$7 + 13 =$



$11 + 9 =$

