

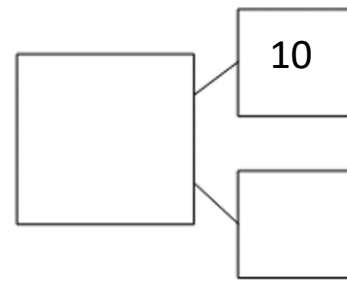
16

Tens	Ones

Write it

Tens	Ones

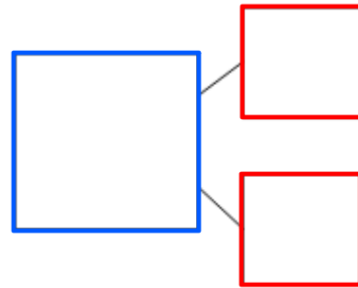
Draw it



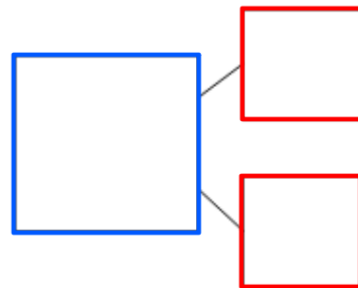
Partition it

Complete the part part whole models for the equations. Combine the parts to find the whole.

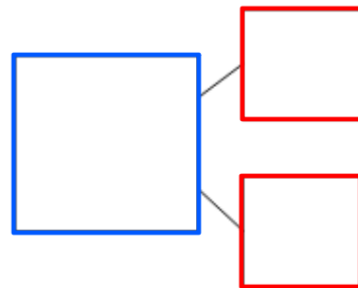
$$12 + 4 = \underline{\quad}$$



$$13 + 3 = \underline{\quad}$$



$$11 + 6 = \underline{\quad}$$



$$17 + 1 = \underline{\quad}$$

