


Number Bonds to 10

Activity Booklet



Rainbow to 10



$$\underline{\quad} + \underline{\quad} = 10$$

$$\underline{\quad} + \underline{\quad} = 10$$

$$\underline{\quad} + \underline{\quad} = 10$$

$$\underline{\quad} + \underline{\quad} = 10$$

$$\underline{\quad} + \underline{\quad} = 10$$

$$\underline{\quad} + \underline{\quad} = 10$$

$$\underline{\quad} + \underline{\quad} = 10$$

$$\underline{\quad} + \underline{\quad} = 10$$












$$\underline{\quad} + \underline{\quad} = 10$$

$$\underline{\quad} + \underline{\quad} = 10$$

$$\underline{\quad} + \underline{\quad} = 10$$

$$\underline{\quad} + \underline{\quad} = 10$$

Number Shape Pieces



Say It Make It Write It Mat


Cut these words out and stick them into the 'Read it' section.

$1 + 9$	$2 + 8$	$7 + 3$
$6 + 4$	$5 + 5$	$10 + 0$
$9 + 1$	$8 + 2$	$3 + 7$
$4 + 6$	$0 + 10$	

Read it

Write it


Make it



Can you find the matching number shapes to fill this number shape robot?

Which pieces did you use?
Can you write a number sentence?
What is the total?

$$\square + \square = \square$$




Can you find the matching number shapes to fill this number shape robot?

Which pieces did you use?
Can you write a number sentence?
What is the total?

$$\square + \square = \square$$






Can you find the matching number shapes to fill this number shape robot?

Which pieces did you use?
Can you write a number sentence?
What is the total?

$$\square + \square = \square$$






Can you find the matching number shapes to fill this number shape robot?

Which pieces did you use?
Can you write a number sentence?
What is the total?

$$\square + \square = \square$$






Can you find the matching number shapes to fill this number shape robot?

Which pieces did you use?
Can you write a number sentence?
What is the total?

$$\square + \square = \square$$





Can you find the matching number shapes to fill this number shape robot?

Which pieces did you use?
Can you write a number sentence?
What is the total?


$$\square + \square = \square$$






Number Bonds to Ten Using Number Shapes

How many ways can you make 10? Write your addition statement underneath each representation.

E.g.





$$2 + 4 + 4 = 10$$





Number Bonds to Ten Using Number Shapes

How many ways can you make 10? Write your addition statement underneath each representation.










Make Ten Number Rods Game

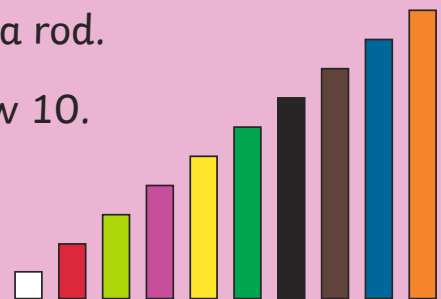
You will need:

- A partner
- A Number Rods Spinner
- Number rods of different colours



Instructions

- Take turns to spin the spinner and take a rod.
- Use your rods to make models that show 10.
- The winner is the first person to make three models showing ten.

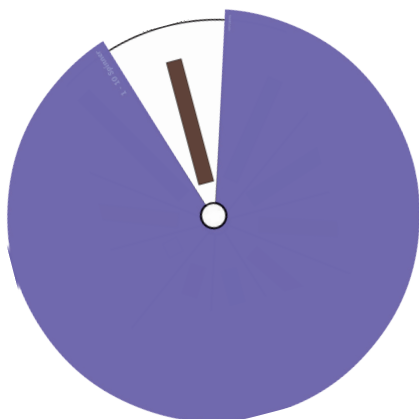


Talk About...

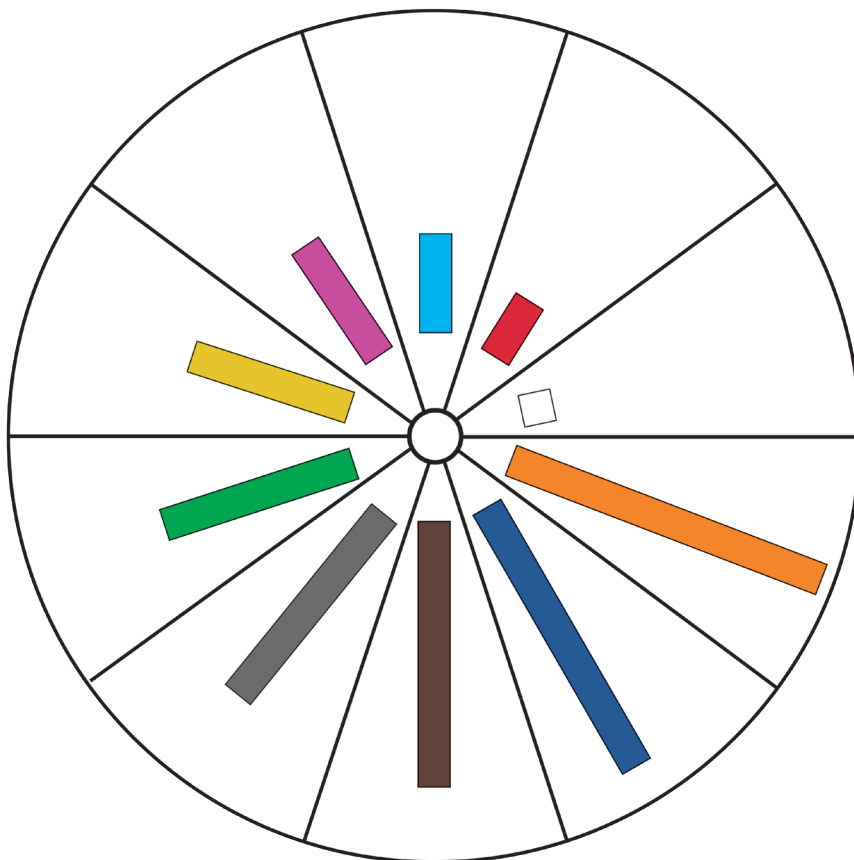
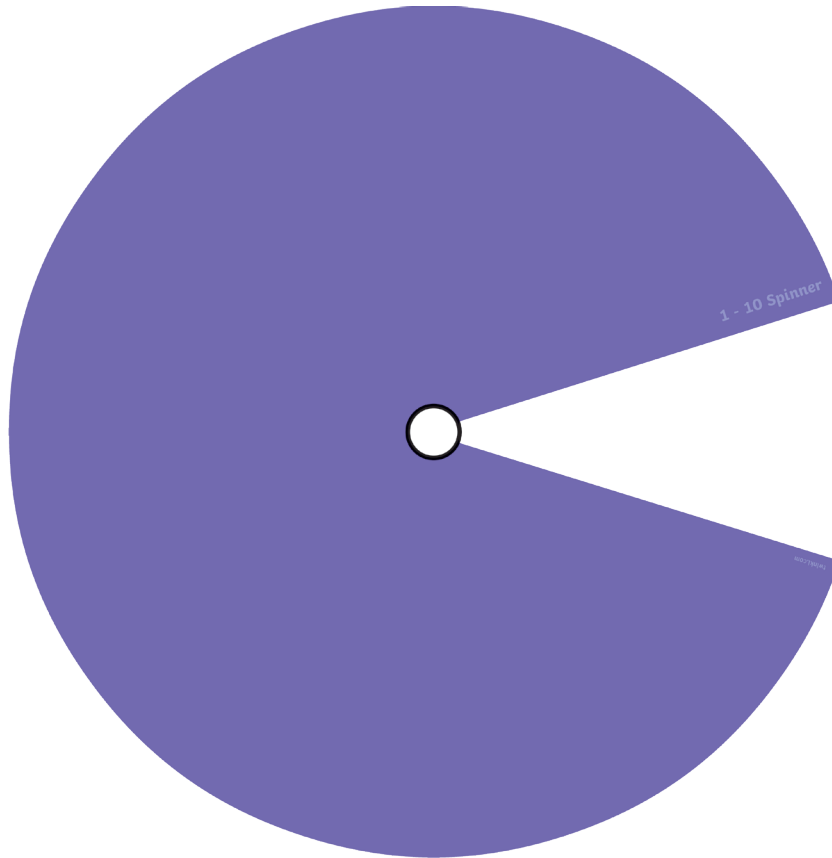
How did you check whether your rods totalled 10?

Did you make any tens using more than two rods?

What is the least number of turns you would need to take to win the game?



Make Ten Number Rods Game



Number Bonds to 10 Number Line Challenge Cards

$$7 + \square = 10$$



Number Bonds to 10 Number Line Challenge Cards

$$6 + \square = 10$$



Number Bonds to 10 Number Line Challenge Cards

$$5 + \square = 10$$



Number Bonds to 10 Number Line Challenge Cards

$$4 + \square = 10$$



Number Bonds to 10 Number Line Challenge Cards

$$\square + 10 = 10$$



Number Bonds to 10 Number Line Challenge Cards

$$\square + 9 = 10$$



Number Bonds to 10 Number Line Challenge Cards

$$\square + 8 = 10$$



Number Bonds to 10 Number Line Challenge Cards

$$\square + 7 = 10$$



Number Bonds to 10 Number Line Challenge Cards

$$\square + 2 = 10$$



Number Bonds to 10 Number Line Challenge Cards

$$\square + 1 = 10$$



Number Bonds to 10 Number Line Challenge Cards

$$\square + 0 = 10$$



Number Bonds to 10 Number Line Challenge Cards

$$0 + 10 = \square$$



Use known number facts to fill in the missing numbers on these bar models.

1.

10	

2.

10	

3.

10	

4.

10	

5.

10	

6.

10	

7.

10	

8.

10	

9.

10	

10.

10	

Number Bonds to 10 Activity Booklet

Worksheet

Find all the number bonds to 10 that are hidden within the grid.

- These are hidden vertically, horizontally and diagonally.
- There must be a plus sign between the two numbers for it to count.
- There are 11 calculations to find.

1	+	9	6	+	6	2	4
2	6	+	4	0	5	+	1
+	10	+	8	+	6	3	+
3	3	+	7	10	1	+	5
5	+	8	+	1	7	6	8
+	5	+	4	2	+	10	2
5	+	2	8	+	3	+	+
5	+	9	+	1	4	0	8

Number Shape Number Bonds to 10 Missing Numbers

Use the number shapes to work out the missing number in each question.

$$\begin{array}{c} \color{orange}{\square} \end{array} + \square = \begin{array}{|c|c|c|c|c|} \hline \circ & \circ & \circ & \circ & \circ \\ \hline \circ & \circ & \circ & \circ & \circ \\ \hline \end{array}$$

$$\begin{array}{|c|c|} \hline \circ & \circ \\ \hline \circ & \circ \\ \hline \end{array} + \square = \begin{array}{|c|c|c|c|c|} \hline \circ & \circ & \circ & \circ & \circ \\ \hline \circ & \circ & \circ & \circ & \circ \\ \hline \end{array}$$

$$\begin{array}{|c|c|c|} \hline \circ & \circ & \circ \\ \hline \circ & \circ & \circ \\ \hline \end{array} + \square = \begin{array}{|c|c|c|c|c|} \hline \circ & \circ & \circ & \circ & \circ \\ \hline \circ & \circ & \circ & \circ & \circ \\ \hline \end{array}$$

$$\begin{array}{|c|c|c|c|} \hline \circ & \circ & \circ & \circ \\ \hline \circ & \circ & \circ & \circ \\ \hline \end{array} + \square = \begin{array}{|c|c|c|c|c|} \hline \circ & \circ & \circ & \circ & \circ \\ \hline \circ & \circ & \circ & \circ & \circ \\ \hline \end{array}$$

$$\begin{array}{|c|c|c|} \hline \circ & \circ & \circ \\ \hline \circ & \circ & \circ \\ \hline \end{array} + \square = \begin{array}{|c|c|c|c|c|} \hline \circ & \circ & \circ & \circ & \circ \\ \hline \circ & \circ & \circ & \circ & \circ \\ \hline \end{array}$$

A number bond diagram. On the left is a green rectangle containing 6 white circles arranged in two rows of three. To its right is a plus sign, followed by a large empty square box. To the right of the box is an equals sign, followed by a blue rectangle containing 10 white circles arranged in two rows of five.

A number bond diagram. On the left is a large empty square box. To its right is a plus sign, followed by a red shape containing 5 white circles (two in the top row and three in the bottom row). To the right of the shape is an equals sign, followed by a blue rectangle containing 10 white circles arranged in two rows of five.

A number bond diagram. On the left is a red shape containing 5 white circles (two in the top row and three in the bottom row). To its right is a plus sign, followed by a large empty square box. To the right of the box is an equals sign, followed by a blue rectangle containing 10 white circles arranged in two rows of five.

A number bond diagram. On the left is a large empty square box. To its right is a plus sign, followed by a purple shape containing 9 white circles (one in the top row and eight in the bottom row). To the right of the shape is an equals sign, followed by a blue rectangle containing 10 white circles arranged in two rows of five.

A number bond diagram. On the left is a light blue vertical rectangle containing 2 white circles. To its right is a plus sign, followed by a large empty square box. To the right of the box is an equals sign, followed by a blue rectangle containing 10 white circles arranged in two rows of five.

Superhero Missing Numbers

Can you find the missing numbers?

$$5 + \text{ } = 10$$

$$10 = 2 + \text{ }$$

$$\text{ } + 3 = 10$$

$$10 = \text{ } + 8$$

$$7 + \text{ } = 10$$

$$\text{ } + 4 = 10$$

$$10 + \text{ } = 10$$

