

# 13

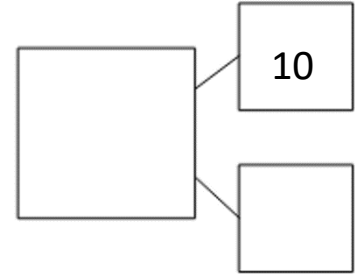
Engage

Tens	Ones

Write it

Tens	Ones

Draw it



Partition it

Choose three digit cards and order from smallest to largest. Record into your book.

Challenge: can you order four numbers?

W	A	G	O	L	L	-	7	1	0	1	4	1	5
---	---	---	---	---	---	---	---	---	---	---	---	---	---



Complete the image and match the numerals to the correct picture.

\_\_\_\_\_

11, 17, 19

14, 12, 5

\_\_\_\_\_



Order the numbers in each group from smallest to largest.

Order all of the numbers from smallest to largest.

Deepening

Mr Monaghan says,



My number is greater than 8 but less than 15

What could his number be? \_\_\_\_\_

Explain your reasoning:

\_\_\_\_\_  
\_\_\_\_\_  
\_\_\_\_\_  
\_\_\_\_\_  
\_\_\_\_\_