


# Number bonds to 20

Draw a line to join pairs of pumpkins that go together to make 20.













# I Spy and Count to 20

Count the autumn objects and write the numeral and number words.




## I Spy and Count to 20


Count the number of autumn related items and write the numeral and number word in the box.


Object	Numeral	Number Word	Object	Numeral	Number Word
					
					
					
					
					


# Place Value Code Breaker




In the number   , what is the value of the  ?


 =


In the number   , what is the value of the  ?

 =

In the number   , what is the value of the  ?

 =

In the number   , what is the value of the  ?

 =

# Greater Than or Less Than

Count the autumn objects in each box. Then, draw the correct symbol in the middle box to show which is greater. Remember – the crocodile always wants to eat the bigger number. The first one has been done for you.



 <input type="text" value="7"/>		 <input type="text" value="10"/>
 <input type="text"/>		 <input type="text"/>
 <input type="text"/>		 <input type="text"/>
 <input type="text"/>		 <input type="text"/>
 <input type="text"/>		 <input type="text"/>
 <input type="text"/>		 <input type="text"/>
 <input type="text"/>		 <input type="text"/>
 <input type="text"/>		 <input type="text"/>

# Autumn Leaves Missing Number

Write down each missing number.

1		3	4		6	7		10	
11	12		14	15		17	18		20
	22	23		25	26		28		
31	32			35	36			39	
41		43		45			48		50

# 10 Times Table Activities

Count in 10s and colour in the grid:

1	2	3	4	5	6	7	8	9	10
11	12	13	14	15	16	17	18	19	20
21	22	23	24	25	26	27	28	29	30
31	32	33	34	35	36	37	38	39	40
41	42	43	44	45	46	47	48	49	50
51	52	53	54	55	56	57	58	59	60
61	62	63	64	65	66	67	68	69	70
71	72	73	74	75	76	77	78	79	80
81	82	83	84	85	86	87	88	89	90
91	92	93	94	95	96	97	98	99	100
101	102	103	104	105	106	107	108	109	110
111	112	113	114	115	116	117	118	119	120

Work out these answers:

a)  $2 \times 10 =$  \_\_\_\_\_

d)  $6 \times 10 =$  \_\_\_\_\_


b)  $10 \times 10 =$  \_\_\_\_\_


e)  $12 \times 10 =$  \_\_\_\_\_


c)  $5 \times 10 =$  \_\_\_\_\_

f)  $9 \times 10 =$  \_\_\_\_\_

How many cubes are there? There are 10 cubes per stack.

a)  \_\_\_\_\_  $\times$  \_\_\_\_\_ = \_\_\_\_\_

b)  \_\_\_\_\_  $\times$  \_\_\_\_\_ = \_\_\_\_\_

c)  \_\_\_\_\_  $\times$  \_\_\_\_\_ = \_\_\_\_\_