

WALT: to compare a group of objects

11

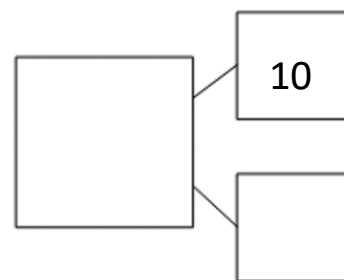
Engage

Tens	Ones

Write it

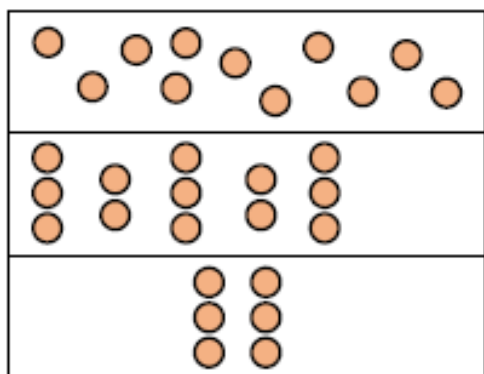
Tens	Ones

Draw it

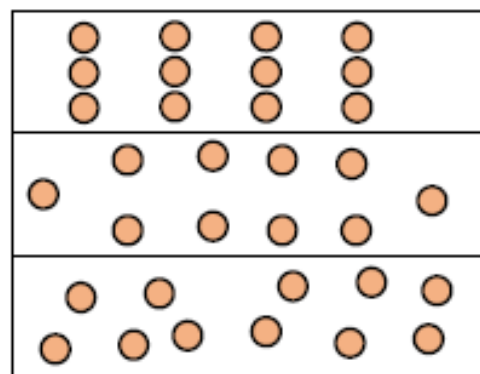


Partition it

Use 'less than', 'greater than' or 'equal to' to complete the sentences to compare the groups.

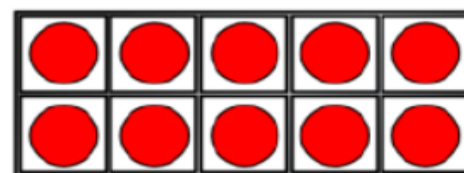
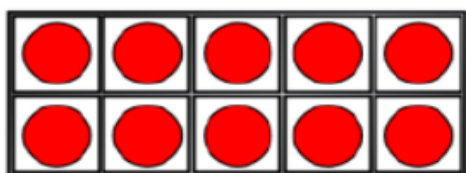


is _____

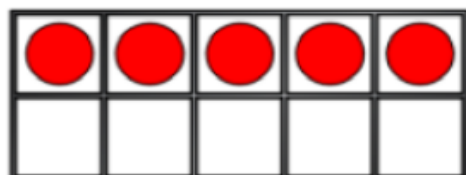


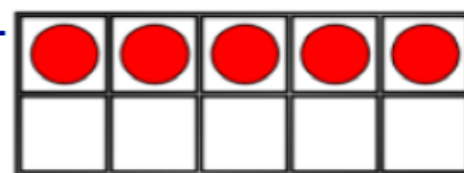


is _____

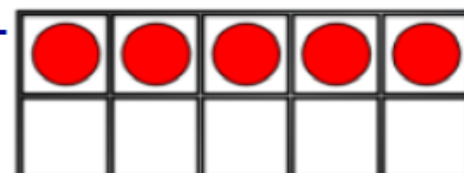
is _____



is _____




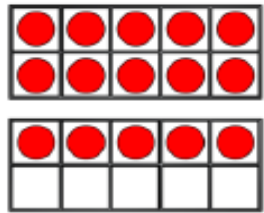
is _____



In a pair both make a number on a bead string (only using up to 20 beads).

Compare your bead strings in a sentence using our star words.


Which image is the odd one out?
Why?



How many books can go in the empty box?



Least



Most

Compare with your partners- have you drawn the same amount of books?

How many possibilities are there?

Is it possible to have 3 or 7 books in the middle pile?