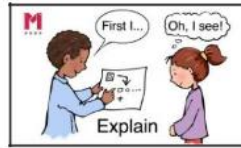


Teddy says,



I can make all the numbers from eleven to twenty using the digits 1 - 9



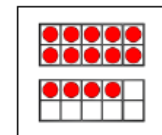
Do you agree?
Explain your answer.

Deepening Task –

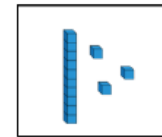
Reading, writing and representing numbers to 20.

Match the numbers to the representations.

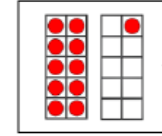
One has been done for you.




eleven



12



13



fourteen