






Number Bonds to 10 Ten Frame


1. 
 $5 + \square = 10$

2. 
 $1 + \square = 10$


3. 
 $3 + \square = \square$


4. 
 $\square + \square = 10$

5. 
 $\square + 2 = \square$

6. 
 $\square + \square = 10$

Can you create your own?

7. 
 $\square + \square = \square$


 $\square + \square = \square$

Number Bonds to 10 Ten Frame **Answers**

1. $\boxed{5} + \boxed{5} = \boxed{10}$

2. $\boxed{1} + \boxed{9} = \boxed{10}$

3. $\boxed{3} + \boxed{7} = \boxed{10}$

4. $\boxed{4} + \boxed{6} = \boxed{10}$

5. $\boxed{8} + \boxed{2} = \boxed{10}$

6. $\boxed{9} + \boxed{1} = \boxed{10}$

7. $\boxed{2} + \boxed{8} = \boxed{10}$