


Clue 1
How many?



Clue 2



Half of 10 =

Clue 3

4 x 2 =


Clue 4



4 ÷ 2 =

Clue 5

How many?




Clue 6

Double 6 =

Clue 7

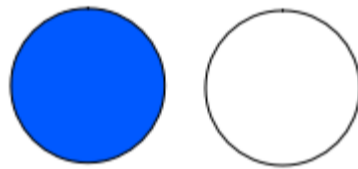
How many?



Clue 8



Half of 2 =



Clue 9

How many wheels?



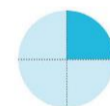
Clue 10

3 x 2 =

Clue 11

Double 1 =

Clue 12



Quarter of 8 =

Clue 13

14 ÷ 2 =



Clue 14

Half of 8 =



Clue 15

Half of 6 =

