


What do all of these 3d shapes have in common?

Handwriting practice lines (red, blue, red, blue, red, blue, red, blue).



Mr Ogden has worked out that a cube has 6 rectangles. Is he correct? Explain your answer.



True / False

Handwriting practice lines (red, blue, red, blue, red, blue, red, blue).

17.3.2022

Deepening

Key Learning: Identify 2d shapes in 3d shapes.

I'm thinking of a 3d shape. It has a square face. What 3d shape could I be thinking of? Give all the possibilities.


Four horizontal lines for writing.

M

●●●●	1 2 3
●●●●	1 3 2
●●●●	2 1 3
●●●●	2 3 1
●●●●	3 1 2
●●●●	3 2 1

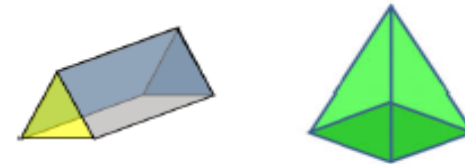
M

What's the same?



What's different?

What is the same about these 2 shapes?



What is different about them?

Handwriting practice lines (red, blue, red, blue, red, blue, red, blue).