



**How many sides and vertices does this shape have?**



Name of shape:

Number of sides:

Number of vertices:

Miss Kay has tried to sort these shapes in order of the number of vertices. Has she done it correctly? Explain your answer.



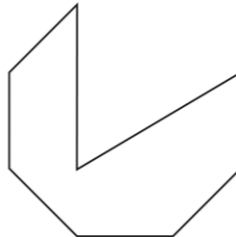

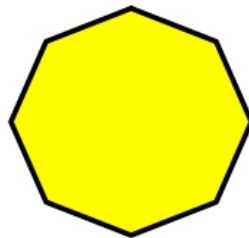
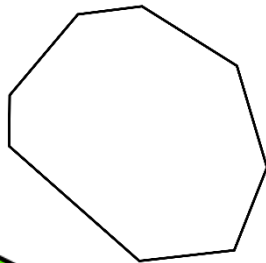
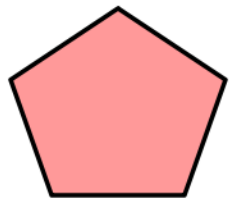
.....

.....

.....

**Deepening**

Circle every **octagon**:



Miss Jefferies is thinking of a shape. It has **half the number of sides as an octagon**. What shape could she be thinking of? Draw the shape and explain why...

.....

.....

.....