






Colour in half of each shape.



What shape has NOT been shaded in  $\frac{1}{2}$ ?



Deepening



True / False



Half of 18 is 6.

How do you know?

Here are some bottles of water.



Each bottle holds 2 litres.

How much water is that in total?

I drink half the bottles.  
How much water is left?



True / False



You can only find  $\frac{1}{2}$  of an even number.

Find  $\frac{1}{2}$  of 2 even numbers and 2 odd numbers to prove your answer: