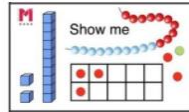

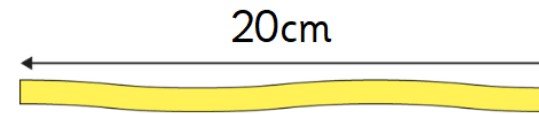


There are 30 jellyfish at The Deep and 5 jellyfish tanks.



How many jellyfish live in each tank?

Show your working out.



Miss Tinker has a 20cm piece of wool for her knitting. She needs to cut it into 5cm pieces.

How many 5cm pieces do you think she can cut from this ribbon?

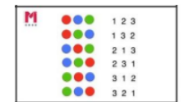
Show your working out.

**Key learning:** to solve division equations using the grouping method


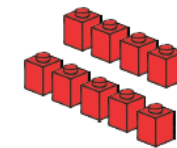
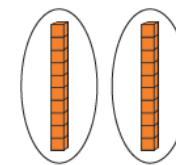

2.2.22

Deepening

Which of these pictures matches the calculation? Circle the correct ones.



$$10 \div 5$$



Mr Ogden has 16 footballs.  
He can fit 2 footballs in a bag.  
How many bags does he need for all of the footballs?

