
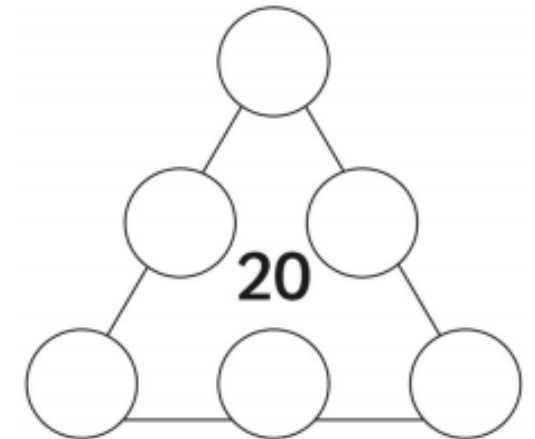
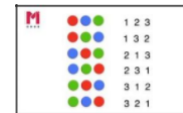


Sam says "If I know that  $9 + 1 = 10$  then I also know that  $19 + 1 = 20$ "



Is he right? Prove it.

Can you use your number bond skills to make sure that each side adds up to 20?



**Key learning:** to recall and use number bonds to 20.

Deepening

Use your number bond knowledge to solve these subtractions:

$$20 - 10 =$$

$$20 - 3 =$$

$$20 - 15 =$$

$$20 - 8 =$$



Correct the errors with these number bonds to 20:

$$10 + 10 = 20$$

$$2 + 17 = 20$$

$$20 = 13 + 7$$

$$20 = 5 + 5$$