

Year 2 Maths Activity Mat

3

Section 1

Fill in the missing boxes.

$$2 \times 6 = \square$$

$$6 \times 2 = \square$$

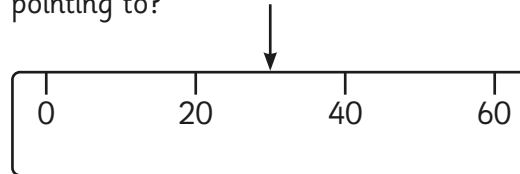
$$\square \div 2 = 6$$

Write the last division number sentence in the pattern:

$$\square \div \square = \square$$

Section 3

What number would the arrow be pointing to?



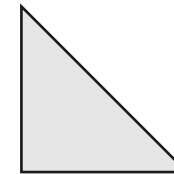
Section 4

Kalim is saving up to buy a toy Velociraptor. He needs £24. He has £12. How much more does he need to save?



Section 5

Draw a line of symmetry on each shape.



Section 6

Put a circle around all the words that mean +

subtract minus
total
multiply
sum of
less than altogether
add
plus
divide equal

Section 2

I think of a number.

I double it.

I subtract 4.

My answer is 8

What was the number I was thinking of?

Section 7

A gardener plants 5 rows of daffodil bulbs, and plants 6 in each row. How many daffodils will they have?

Section 8

Name 3 things you might see which are the shape of a cuboid.

Year 2 Maths Activity Mat: 3

Answers

Section 1

Fill in the missing boxes.

$$2 \times 6 = \boxed{12}$$

$$6 \times 2 = \boxed{12}$$

$$\boxed{12} \div 2 = 6$$

Write the last division number sentence in the pattern:

$$\boxed{12} \div \boxed{6} = \boxed{2}$$

Section 2

I think of a number.

I double it.

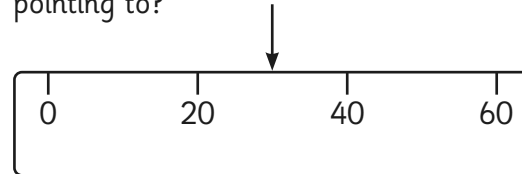
I subtract 4.

My answer is 8

What was the number I was thinking of?

Section 3

What number would the arrow be pointing to?



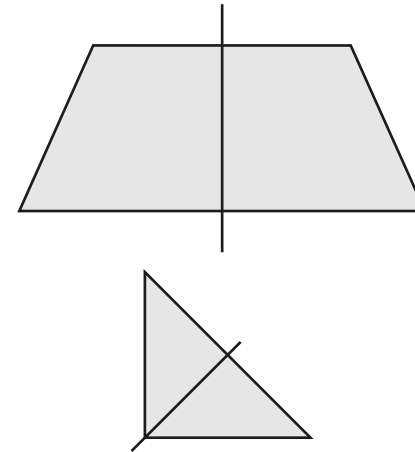
Section 4

Kalim is saving up to buy a toy Velociraptor. He needs £24. He has £12. How much more does he need to save?



Section 5

Draw a line of symmetry on each shape.



Section 6

Put a circle around all the words that mean +

subtract minus

total

multiply

sum of

less than

altogether

add

plus

divide

equal

Section 7

A gardener plants 5 rows of daffodil bulbs, and plants 6 in each row. How many daffodils will they have?

Section 8

Name 3 things you might see which are the shape of a cuboid.

Accept any 3 appropriate answers